


Name: _____


Date: _____

Ladybird Doubling


Double the ladybirds' spots and complete the addition sums.




$$1 + 1 = \square$$




$$2 + 2 = \square$$



$$3 + 3 = \square$$



$$4 + 4 = \square$$




$$5 + 5 = \square$$

Name: _____


Date: _____

Ladybird Doubling


Double the ladybirds' spots and complete the addition sums.




$$6 + 6 = \square$$




$$7 + 7 = \square$$



$$8 + 8 = \square$$



$$9 + 9 = \square$$



$$10 + 10 = \square$$

