

Name: _____

Date: _____

Minibeasts Subtraction 0-10


Cross off the minibeasts and write the answers in the boxes.



$$- \quad 2 \quad = \quad \square$$




$$- \quad 1 \quad = \quad \square$$



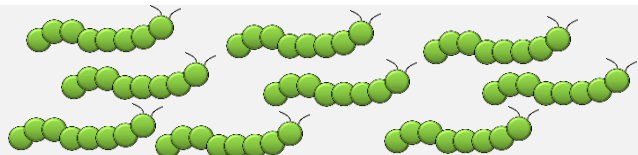
$$- \quad 3 \quad = \quad \square$$




$$- \quad 4 \quad = \quad \square$$



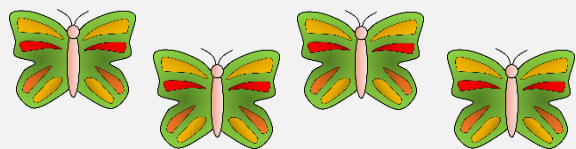
$$- \quad 1 \quad = \quad \square$$




$$- \quad 5 \quad = \quad \square$$




$$- \quad 6 \quad = \quad \square$$



$$- \quad 4 \quad = \quad \square$$



$$- \quad 2 \quad = \quad \square$$



$$- \quad 0 \quad = \quad \square$$

Name: _____

Date: _____

Minibeasts Subtraction 0-10

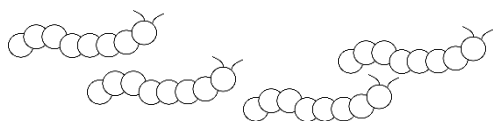
Cross off the minibeasts and write the answers in the boxes.



$$- \quad 2 \quad = \quad \square$$



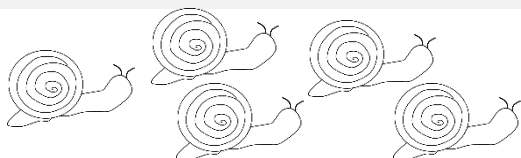
$$- \quad 1 \quad = \quad \square$$



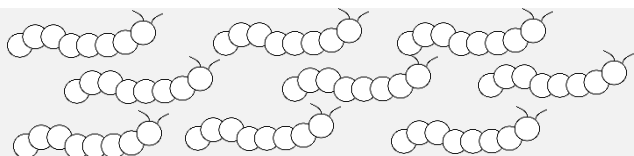
$$- \quad 3 \quad = \quad \square$$




$$- \quad 4 \quad = \quad \square$$




$$- \quad 1 \quad = \quad \square$$



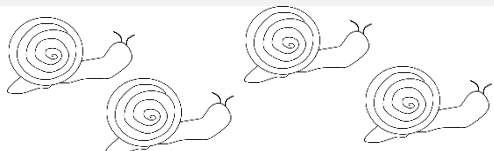
$$- \quad 5 \quad = \quad \square$$




$$- \quad 6 \quad = \quad \square$$



$$- \quad 4 \quad = \quad \square$$



$$- \quad 2 \quad = \quad \square$$



$$- \quad 0 \quad = \quad \square$$