


Name: _____

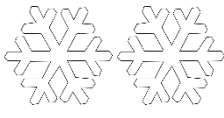
Date: _____

Winter Addition 0-10

Add the objects together and write the answers in the boxes.

 +  =



 + =

+  =

 +  =

 + =

 +  =

 +  =

 +  =

 +  =

 +  =



Name: _____

Date: _____

Winter Addition 0-10

Add the objects together and write the answers in the boxes.

$$\begin{array}{ccccccc} \text{❄} & \text{❄} & \text{❄} & \text{❄} & + & \text{❄} & = & \square \end{array}$$

$$\begin{array}{ccccccc} & \text{❄} & \text{❄} & & + & & = & \square \end{array}$$

$$\begin{array}{ccccccc} & & & & + & \text{❄} & \text{❄} & = & \square \end{array}$$

$$\begin{array}{ccccccccccc} \text{❄} & \text{❄} & \text{❄} & \text{❄} & \text{❄} & + & \text{❄} & \text{❄} & \text{❄} & \text{❄} & = & \square \end{array}$$

$$\begin{array}{ccccccc} & & \text{❄} & & + & & = & \square \end{array}$$

$$\begin{array}{ccccccccccc} \text{❄} & \text{❄} & \text{❄} & \text{❄} & \text{❄} & \text{❄} & + & \text{❄} & \text{❄} & = & \square \end{array}$$

$$\begin{array}{ccccccccccc} \text{❄} & \text{❄} & \text{❄} & \text{❄} & \text{❄} & \text{❄} & + & \text{❄} & \text{❄} & \text{❄} & = & \square \end{array}$$

$$\begin{array}{ccccccccccc} \text{❄} & \text{❄} & \text{❄} & \text{❄} & \text{❄} & \text{❄} & + & \text{❄} & = & \square \end{array}$$

$$\begin{array}{ccccccccccc} & & \text{❄} & & + & \text{❄} & \text{❄} & \text{❄} & \text{❄} & \text{❄} & = & \square \end{array}$$

$$\begin{array}{ccccccc} \text{❄} & \text{❄} & \text{❄} & + & \text{❄} & \text{❄} & \text{❄} & = & \square \end{array}$$

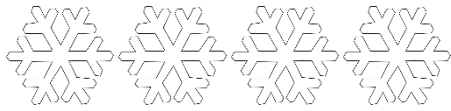


Name: _____

Date: _____

Winter Addition 0-10

Add the objects together and write the answers in the boxes.



+

1

=



+

0

=

+

2

=



+

4


=



+

0


=



+

2


=



+

3

=



+

1

=



+

6

=



+

3

=



Name: _____

Date: _____

Winter Addition 0-10


Add the objects together and write the answers in the boxes.



+

1

=



+

0

=

+

2

=



+

4


=



+

0


=



+

2


=



+

3

=



+

1

=



+

6

=



+

3

=




Name: _____

Date: _____

Winter Addition 0-10

Add the objects together and write the answers in the boxes. Then make the number sentences below.

 +  =

 + =

+  =

 +  =

 + =

 +  =





Name: _____

Date: _____

Winter Addition 0-10

Add the objects together and write the answers in the boxes. Then make the number sentences below.

 +  =

 + =

+  =

 +  =

 + =

 +  =



Name: _____

Date: _____



Winter Addition 0-10

Add the objects together and write the answers in the boxes. Then make the number sentences below.

 +  =

 +  =

 +  =

 +  =

 +  =

 +  =




Name: _____

Date: _____



Winter Addition 0-10

Add the objects together and write the answers in the boxes. Then make the number sentences below.

 +  =

 +  =

 +  =

 +  =

 +  =

 +  =

