



TOURISM: GRADE 12
TERM 1 CYCLE TEST

TIME: 1 HOUR 30 MIN
MARKS: 100

INSTRUCTIONS:

- No notes may be taken in the room.
- All questions are compulsory.
- Number each question as it is numbered on the question paper.
- Draw a line after each question.
- **ENJOY THE PAPER !!**



SECTION A: SHORT QUESTIONS

QUESTION 1

Four possibilities are provided as possible answers to the following questions. Choose the answer and only write the letter (A – D) next to the question number (1.1.1–1.1.20) in your answer script, for example: 1.1.21 D.

- 1.1.1 The most suitable tourist activity that matches the profile of an adventure tourist: (1)
- A. A visit to the National Women's Monument in Bloemfontein
 - B. A sunset cruise on the Zambezi
 - C. Shark cage diving in Gansbaai
 - D. A city tour on the Cape Town's open-top red bus
- 1.1.2 A global event that has two categories, namely the summer and winter category. Each category takes place every four years and attracts thousands of tourists and sportsmen of various sports. (1)
- A. Olympic Games
 - B. Wimbledon Tennis
 - C. Tour De France
 - D. FIFA World Cup
- 1.1.3 Travel documents during international travel: (1)
- A. Valid passport, visa, health certificate, IDP & flight tickets
 - B. Valid passport, visa, health certificate, IDL & airline tickets
 - C. Valid passport, visa, health certificate, ID & flight tickets
 - D. Valid passport, visa, health certificate, UTK & airline tickets (1)

1.1.4 The following stamp gives permission to enter a country, issued by the...



- A. Minister of Tourism
- B. Minister of Foreign Affairs
- C. The President of the Visiting Country
- D. Consulate of the visiting country

1.1.5 Choose the right combination regarding the positive effect of world events on the economy. (1)

- A. Very high interest rates mean that repayments have to be made so that the influence of the interest does not become an excessive amount.
- B. Improves the status and awareness of the host country and increases the interest of foreign businesses wishing to make possible investments in the country.
- C. A lot of money is spent on the upgrading of facilities
- D. High inflation and interest rates

1.1.6 If we travel from _____ over the IDL we will have to add a day (1)

- A. West to East
- B. East to West
- C. North to South
- D. South to West

1.1.7 Which one of the following is NOT an impact of a global event? (1)

- A. Improving facilities leading to price increases that local people cannot afford
- B. Transport infrastructure that improves such as the Gautrain.
- C. Skills development leading to better service delivery.
- D. Less job opportunities.



(1)

1.1.8 The _____ determines the time zone of all countries in the world:
A. IDP
B. IDL
C. UTC
D. Equator

1.1.9 I will need a passport if I... (1)
A. am an inter-provincial traveler.
B. am an intra-provincial traveler.
C. am a local traveler.
D. am an international traveler.

1.1.10 Chad passes Matric and receives a scholarship in Britain. He does not have a passport. His teacher advises him to apply for his passport as soon as possible. Chad will need the following: (1)
1. Money to pay the fee
2. Two coloured passport photos
3. Health certificate
4. Proof of identity

- A. 1,4,3
B. 2,4,3
C. 1,2,4
D. 1,2,3 (1)



1.1.11 A disease that affects the liver. It spreads through the intake of contaminated water and food. (1)
A. Hypatitis A
B. Hypatitis B
C. Cholera
D. Bilharzia

1.1.12 A tourist will need a Schengen visa if he: (1)
A. Travels to Australia.
B. Travels to Ireland.
C. Travels to the United States.
D. Travels to Russia.

1.1.13 Upon arrival at an international airport, tourists who choose the red canal will have the following in their possession... (1)

- A. Firearms and all biological things
- B. One month's prescribed medication
- C. 40 ml perfume
- D. 200 grams of pipe tobacco

1.1.14 The main reason why it is important to be vaccinated before visiting affected areas is to... (1)

- A. Stay healthy
- B. Get fit
- C. Prevent you from being infected or infecting others
- D. Live longer

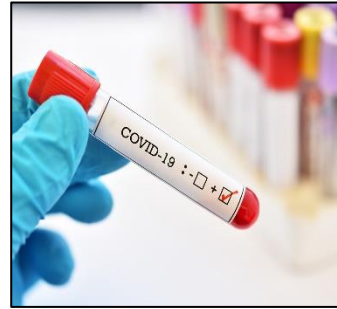


1.1.15 Choose the combination that best represents the following unforeseen events. (1)

A: Strikes at VUT



C: Covid-19



B: Tsunami in Japan



D: Missing Air-Malaysia




- A. Combination A and B
- B. Combination A and C
- C. Combination B, C and D
- D. Combination A, B and C

1.2 Choose the most appropriate word that sums up the explanation the best:

Schengen Visa, **travel allowance**, ~~Greenwich~~, **Declare**,
Visa, Equator, ID-document, HEALTH
CERTIFICATE, green channel, **customs**, DRUGS AND
POISON, **IDP**, red channel, ~~IDL~~, **PASSPORT**, shipwreck

- 1.2.1 If a tourist has this in his luggage, there will be serious consequences as it is regarded as prohibited / illegal goods. (1)
- 1.2.2 A document that all tourists need at the airport if they travel around in South-Africa. (1)
- 1.2.3 This meridian determines the date / day. (1)
- 1.2.4 This section controls the flow of goods in and out of a country. (1)
- 1.2.5 A tourist follows this route if he has nothing to declare. (1)



1.3 Study the following pictures and choose the best term / descriptions (1.3.1-1.3.5) that will fit each picture. Only write the letter next to the question number. Example: 1.3.6 H

1.3.1 Malaria

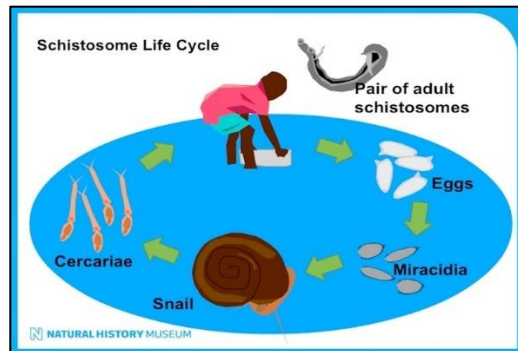
A.



(1)

1.3.2 Cholera precautions

B.



(1)

1.3.3 Precautions for UV radiation and photokeratitis

C.



(1)

1.3.4 WHO – World health organization

D.



(1)

1.3.5 Bilharzia

E.



(1)

SECTION B: LONGER QUESTIONS

QUESTION 2 [7]



PARIS 2024



The Olympic Games are a tourism event that attracts thousands of tourists to a certain host country every four years. This has many advantages and disadvantages for this host country.

Hosting an Olympics is a big financial injection for any country, but it requires a lot of expenses and planning that has to be done in advance to make it a success.



Answer the following questions on international sporting events.

- 2.1 Name any other TWO similar sporting events that fall into the same category as the one depicted in the images above. (2)
- 2.2 Paris will have to undergo many changes and preparations before they can host the next Summer Olympics. Describe any TWO positive effects of hosting this event in Paris. (2)
- 2.3 Keep the Olympic Games in mind and create a schematic representation of the impact it will have on Paris' tourism industry and economy in 2024. (3)

QUESTION 3 [10]

Study the newspaper articles on the next page and answer the questions on unforeseen circumstances and political situations.

- 3.1 Identify TWO political situations from the article and also indicate the type of political situation. (Your answer should therefore contain the title of the article as it appears in the newspaper and then write down the type of political situation) * Note that the newspaper is fictional and that you do not need to read the small print. (2)
- 3.2 You're a journalist. Your boss expects you to gather stories from around the world that deal with various unforeseen circumstances. Name TWO types of unforeseen circumstances that would be appropriate to investigate when writing these articles. (2)
- 3.3 Regarding your answer in question 2.2, write headings of TWO articles, which appear in the newspaper, which will also be classified under unforeseen circumstances. (2)
- 3.4 These events have a major impact on the tourism industry. You were approached to write a short and informative follow-up article for the next issue of the newspaper. Your article should focus on the effects of political situations and unforeseen circumstances on the tourism industry. You should focus on the following aspects:
- Layout of a newspaper article.
 - In bullet form.
 - Contains descriptive sentences.
 - Contains at least 4 facts.
 - Proposed with an appropriate heading as it will appear in the newspaper
- (4)



QUESTION 4 [12]

Tour planning and the tour budget.

- 4.1 Identify the terminology used in the following advertisement which will give a tourist an indication on how they should determine their tour budget and give a short explanation what it entails. (2)



- 4.2 **Gaby is planning a trip to Zanzibar. Her main reason for traveling is to spend time in the pristine natural environment of Zanzibar. This means that she will be an eco-tourist. She is very much looking forward to the holiday, especially for the reason that she will be completing a diving course in Zanzibar. She realizes there are many hidden / diverse expenses that she needs to include in her budget.**

- a) Explain to Gaby what diverse expenses are by giving an example of this and briefly explaining them. (2)
- b) Name any TWO of the four tour components that will determine her travel program / plans. (2)
- c) Provide some guidelines on any TWO factors that Gaby should consider when compiling her itinerary. (2)



QUESTION 5 [16]

Health and Safety.



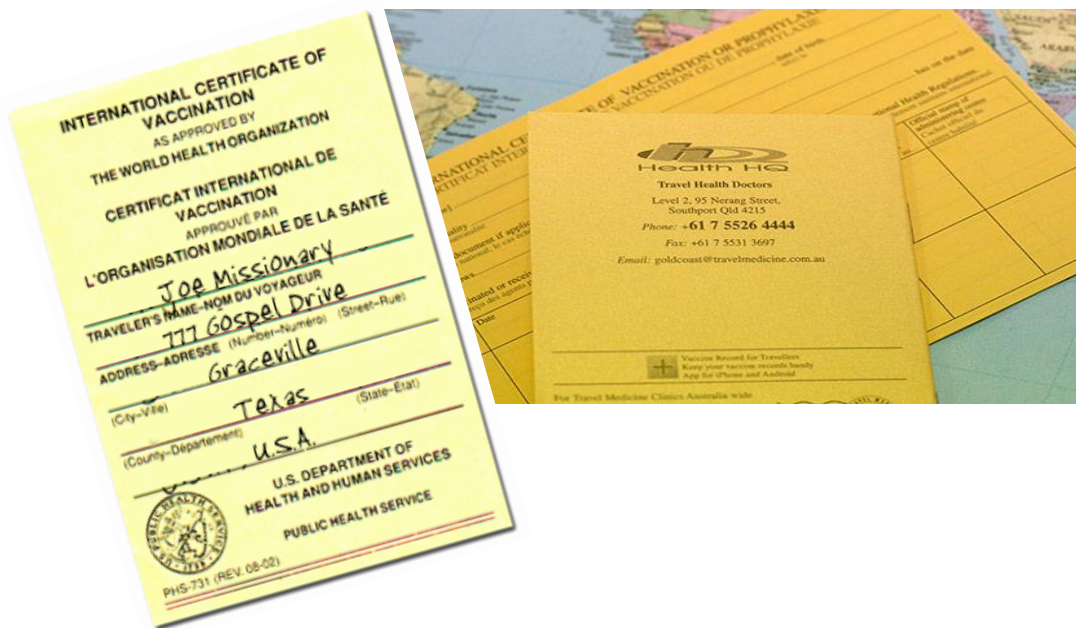
5.1 The above mentioned institution has a huge impact on the travel industry. Explain their role and responsibility on which they particularly focus to ensure the well-being of all tourists and people worldwide. Substantiate your answer by applying them to the global pandemic pictured above. (3)

5.2 You are appointed by the WHO as the organization's graphic designer. Your task is to create an informative awareness poster that can be used worldwide in all health facilities and public places to contribute to raising awareness about the precautions that can be taken to combat the spread of Covid-19.

The task is given to you to do the design by using as little text as possible and instead focus on a visual representation of the precautions so that it can be understood and used all over the world. You should try to portray at least 4 of the measures as creatively as possible.

Use one A4 page to submit your design to the WHO Management and Marketing Board in order for them to approve or reject it. If approved, your design will be used worldwide to raise awareness about the virus. (5)

- 5.3 The following yellow card / travel document is required by some countries from tourists before they will be allowed to travel internationally. Explain to Hugo what this document is called and why this document is important during international travels. (2)



- 5.4 Mia saw the following business / clinic sign along the road she travelled on. Explain to her the role of these types of clinics, so that it is clear what the difference is between these clinics and ordinary clinics. (2)



- 5.5 Compare the two different types of vaccinations using a comparative table so that the difference is clear.

Recommended vaccination	Compulsory vaccination

(4)

VRAAG 6 (13)

Application of tour and route planning together with the budget of a trip

Read the following scenario and answer the questions that follow.

Elmané and Aneri will travel to Europe for the December holidays from 14 Dec 2022 until the new year. They will be traveling with another group of tourists, as this will be their first time in this foreign continent. This makes it so much easier for them as they do not have to worry about all the bookings and details of the trip as the travel agent arranges everything on their behalf and they are only expected to pay a lump sum for the package which includes transport and all meals.

They will have to budget for activities that they are going to enjoy in Europe. Various activities are included in the additional tourist profile set by the travel agent.

Convert the final amount for the day to Rand if the exchange rate for one Euro is R15,97.

Day two of the itinerary should be compiled from the following ideas in the collage. Use it to answer question 6.3. Use Addendum A for additional information on the activities.



PARIS CARRIAGE RIDE



Hôtel Eiffel Turenne

7th arr., Paris

Located 1 km from the Eiffel Tower, Hôtel Eiffel Turenne features a bar, free WiFi in the public areas and a...
[Show more](#)

Avg. price/night: ZAR 1,125

9.0 Superb · 1,540 reviews

- 6.1 What type of tour will Elmané and Aneri undertake? (1)
- 6.2 Explain why an additional tourist profile is important in the case where travel agents compile trips on behalf of tourists according to their needs and desires. (1)
- 6.3 Use the information provided about Elmané and Aneri's travel plans and draw up a tour plan for day two of Elmané and Aneri's tour.

Use the following format as provided below to compile a tour plan for the two tourists. It should be clear, informative, logical and easy to understand.

Date and time	Accommodation	Transport	Attraction	Activity	Budget

(8)

QUESTION 7 (25)

Travel documents:

Study the following pictures and complete the questions accordingly:




7.1

	A	B	C
Description of the specific travel document:			
Where can I get it / apply for it?			

(6)

7.2 You are currently on route and you noticed the following icons at an international airport. Luckily you have Tourism as a school subject and understand what each of these following points at the airport entail.





Explain to your friend who is traveling with you, what is represented by these icons and what is going to happen at each of the points at the airport. (4)



7.3 Look at the following items found in the luggage of various tourists and determine if he / she will be allowed to take them with them on their international trip. Explain to the tourists why you say they may / may not take it with them by referring to the type of goods and the restriction thereof. Answer only letter a - c.

Example:

Yes the tourist will be allowed to take it with him – Duty free / Tax-free goods
 ✓ although it exceeds the 1 liter limit, the tourist will have to pay tax on the rest ✓

<p>Example: 3 x bottles of various spirits.</p> 	<p>a) Firearm</p> 	<p>b) 20 days of prescribed medication</p> 	<p>c) 120ml of perfume</p> 
---	---	---	--

(6)

Question 8 [8]

Use the World Time Zone Map (ADDENDUM B) to help you answer the following questions. Pay attention to show all your calculations.

- 8.1 Mr. van Aardt lives in New Zealand and makes a call from New Zealand to South Africa at 19:00. Calculate the time his family will receive the call in South Africa. Show all your calculations. (3)
- 8.2 A flight to London leaves ORTIA on 5 June at 21:00. Calculate the time and date of arrival in London if the flight duration was 12 hours. Show all your calculations. (3)
- 8.3 Compare the following terms "Flight fatigue" and "Jetlag" to make the difference clear. (2)



TOTAAL: 100

ADDENDUM A

Le Ballon de Paris

Parc André Citroën, 75015 Paris

Located in the Parc André Citroën, rue de la Montagne de la Fage, here is an unforgettable experience in which you will get in a hot-air balloon and rise up to 150 metres above the roofs of Paris. It will give you a breathtaking view of the most beautiful city of the world. This offer is €35 pp.

Auteuil Greenhouse Gardens

3 Avenue de la Porte d'Auteuil, 75016 Paris

Located in the Bois de Boulogne, in the 16th District, this historical garden gathers different kinds of gardens together (French, Japanese, contemporary, Mediterranean) and owes its name to the greenhouses it has. There are no less than 5500 plant species and also many animal species @ 7 Euro's entrance fee. Here's everything you need to spend an enjoyable moment in the heart of Paris.

Carriage Ride

Disney princes and princesses in their carriages still make you dream? Or do you want a romantic and original ride? Here is your chance to make your dreams come true in a carriage: **Book a Royal Ride in a Horse Drawn Carriage (1 Hour 30 Minutes)** for only €22 per person sharing.



ADDENDUM B

