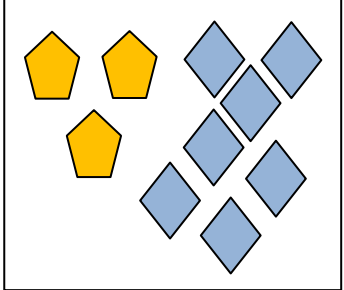
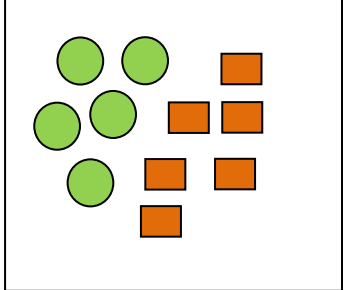
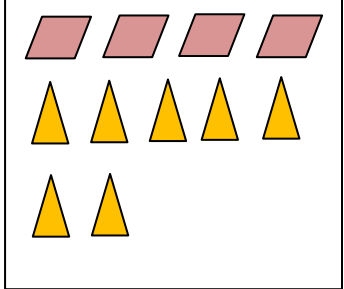


Ratios and Fractions – Practice the Skill

Name _____

Date _____

Describe the images using ratios and fractions.

1	The ratio of pentagon to diamonds is _____:_____.	
2	The ratio of diamonds to all shapes is _____:_____.	
3	— of the shapes are pentagons.	
4	The ratio of circles to rectangles is _____:_____.	
5	Ratio of rectangles to all shapes is _____:_____.	
6	— of the shapes are circles.	
7	The ratio of triangles to parallelograms is _____:_____.	
8	Ratio of parallelograms to all shapes is _____:_____.	
9	— of the shapes are triangles.	
10	The ratio of pentagons to triangles is _____:_____.	