






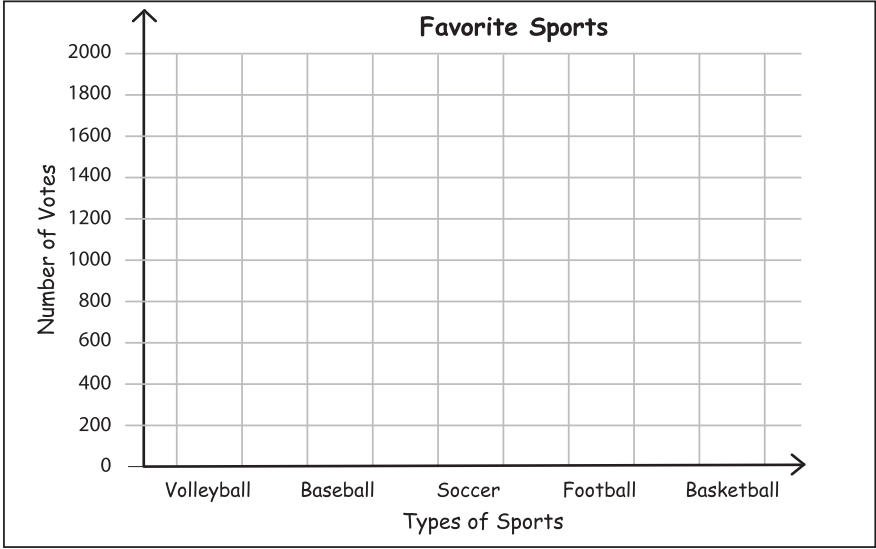
Name : _____

Bar Graph - Sports

Sheet 2

A sports magazine conducted a survey among its readers and asked about their favorite sports. They recorded the data below. Draw a bar graph to represent the data and answer the questions.

Volleyball	Baseball	Soccer	Football	Basketball
				
1200	900	1500	1800	600






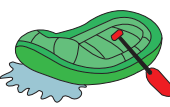
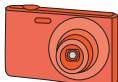
- 1) Which sport was the least popular? _____
- 2) Which was the most popular sport? _____
- 3) How many more votes does soccer require so it has the same number of votes as football? _____
- 4) If soccer received 200 more votes, would it top the chart? _____

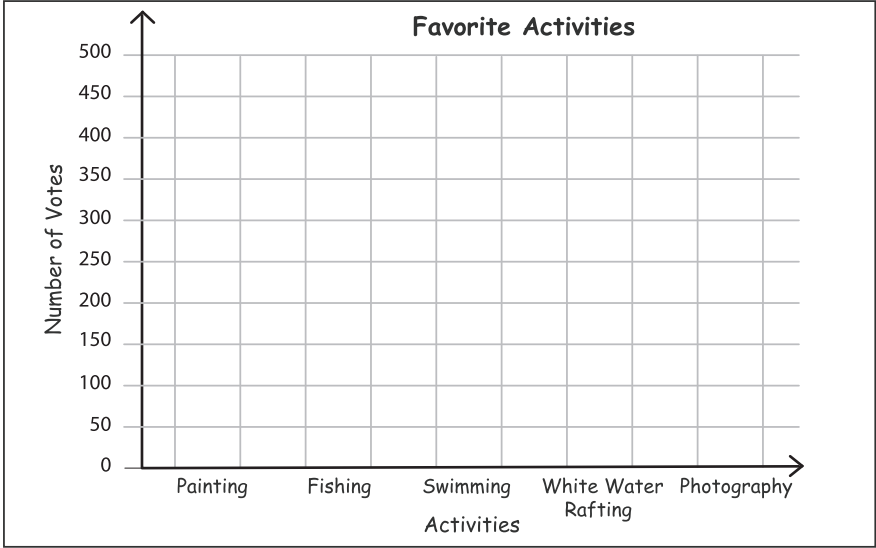
Name : _____

Bar Graph - Summer Camp

Sheet 3

1475 children took part in Hill Valley Summer Camp. At the end of the camp, the organizer conducted a survey among the participants on their favorite camp activity and recorded the data. Draw a bar graph to represent the data. Answer the questions.

Painting	Fishing	Swimming	White Water Rafting	Photography
				
400	175	450	350	125



- 1) Which activity was the second most popular? _____
- 2) Which activity had received twice as many votes as fishing? _____
- 3) How many participants had chosen either swimming or photography? _____
- 4) If painting received 25 more votes, would it surpass swimming? _____